



# THE LOOPY LIBRARY



## GALLERY 1 ▼



## ART



### PAINTINGS FOR SALE

Each painting has a price on it. Which painting in Gallery 1 should you move to Gallery 2 so that the total value of the paintings in Gallery 2 is twice as much as the paintings in Gallery 1?

HECTOR THE ARTIST HAS PAINTED HIMSELF EIGHT TIMES, BUT WHICH TWO ARE EXACTLY THE SAME?



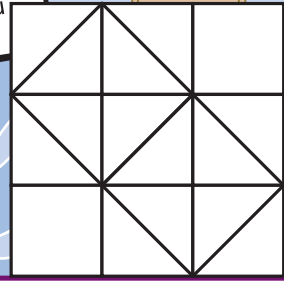
## GALLERY 2 ▼



## PUZZLES

### MINDBENDER

How many squares and how many triangles can you find in this block?



TAKE IT BACK! IT'S TOO DIFFICULT!



IT'S ONLY A LITTLE BIT DIFFICULT!


KRISS KROSS PUZZLE COMPANY

PUZZLES DELIVERED TO YOUR DOOR

## WILDLIFE

### POLAR BEARS


Polar Bears are the largest members of the Bear family. They live in the Northern Arctic where it is extremely cold (-55 degrees celsius). To protect themselves from the cold they have to maintain a thick layer of fat (blubber). They feed on seals and fish and they are also good swimmers, using their large feet as paddles.



CATCHING FISH IN THE ARCTIC S. KIMOS

## GARDENING

### HANGING BASKETS FOR SALE



WHAT KIND OF FRUIT DO POLAR BEARS LIKE?  
...POLAR PEARS!  
HEY! COME BACK!  
I'VE GOT LOADS OF POLAR BEAR JOKES!



NO THANKS!




AAAAGH!!

GIANT CACTUS

### Flower Pots

If each flower is worth 1 point, how many flowers should be growing in the centre pot?



Answers: Paintings MOVE THE £6 PAINTING INTO GALLERY 2, THE TOTAL VALUE WILL THEN BE £42. GALLERY 1 WILL THEN TOTAL £21. 1 AND 7 ARE IDENTICAL. Mindbender 16 SQUARES AND 26 TRIANGLES. Flower Pots 16 FLOWERS, AS EACH ROW DOWN, ACROSS AND DIAGONAL TOTALS 6.